



Name: _____

Class: _____

Date: _____

Teacher: _____

Apple Subtraction


Solve the subtraction by crossing out the numbers to be subtracted. Write the answers on the line.



$5 - 2 = \underline{\hspace{2cm}}$



$3 - 2 = \underline{\hspace{2cm}}$



$4 - 1 = \underline{\hspace{2cm}}$



$3 - 1 = \underline{\hspace{2cm}}$



$5 - 1 = \underline{\hspace{2cm}}$



$3 - 3 = \underline{\hspace{2cm}}$



Name: _____

Class: _____

Date: _____


Teacher: _____

Apple Subtraction

Solve the subtraction by crossing out the numbers to be subtracted. Write the answers on the line.




$5 - 4 = \underline{\hspace{2cm}}$




$2 - 2 = \underline{\hspace{2cm}}$



$5 - 3 = \underline{\hspace{2cm}}$



$2 - 1 = \underline{\hspace{2cm}}$



$4 - 4 = \underline{\hspace{2cm}}$



$1 - 1 = \underline{\hspace{2cm}}$