



# Fishy Mathematics

Let's learn the Equal, Less & Greater Than Symbols

Name:


Date:

Section:


Score:

Count the fish in the fishbowls and write down the correct number. Then, compare the number and write  $>$ ,  $<$  or  $=$  to show which fishbowl has more, less, or equal number of fish.


1.




—




2.




—



3.



—



KIDPID.COM



# Fishy Mathematics

Let's learn the Equal, Less & Greater Than Symbols

**Name:**


**Date:**

**Section:**


**Score:**

Count the fish in the fishbowls and write down the correct number. Then, compare the number and write  $>$ ,  $<$  or  $=$  to show which fishbowl has more, less, or equal number of fish.


1.




—




2.




—



3.



—



KIDPID.COM



# Fishy Mathematics

Let's learn the Equal, Less & Greater Than Symbols

**Name:**


**Date:**

**Section:**

**Score:**

Count the fish in the fishbowls and write down the correct number. Then, compare the number and write  $>$ ,  $<$  or  $=$  to show which fishbowl has more, less, or equal number of fish.


1.




—




2.




—



3.



—



KIDPID.COM



# Fishy Mathematics

Let's learn the Equal, Less & Greater Than Symbols

**Name:**


**Date:**

**Section:**


**Score:**

Count the fish in the fishbowls and write down the correct number. Then, compare the number and write  $>$ ,  $<$  or  $=$  to show which fishbowl has more, less, or equal number of fish.


1.




—



2.




—



3.



—



KIDPID.COM