



Name: _____

Section: _____

Date: _____

Teacher: _____

KOALA SUBTRACTION

Cross out the correct number of koalas to help you solve the following subtraction problems. Write the correct solution in the blank provided.



$$5 - 2 = \underline{\quad}$$



$$4 - 1 = \underline{\quad}$$

KIDPID.COM



$$6 - 1 = \underline{\quad}$$



Name: _____

Section: _____

Date: _____

Teacher: _____



$$6 - 4 = \underline{\quad}$$



$$5 - 5 = \underline{\quad}$$



$$3 - 2 = \underline{\quad}$$



$$3 - 1 = \underline{\quad}$$

KIDPID.COM



Name: _____

Section: _____

Date: _____


Teacher: _____



$$6 - 6 = \underline{\quad}$$



$$4 - 2 = \underline{\quad}$$



$$2 - 2 = \underline{\quad}$$

KIDPID.COM



$$3 - 3 = \underline{\quad}$$



Name: _____

Section: _____

Date: _____

Teacher: _____



$$5 - 4 = \underline{\quad}$$




$$4 - 4 = \underline{\quad}$$



$$1 - 1 = \underline{\quad}$$

KIDPID.COM



$$6 - 2 = \underline{\quad}$$



Name: _____


Section: _____

Date: _____

Teacher: _____



$$5 - 1 = \underline{\quad}$$



$$6 - 2 = \underline{\quad}$$



$$5 - 3 = \underline{\quad}$$



$$6 - 5 = \underline{\quad}$$

KIDPID.COM