




Name:

Section:

Date:

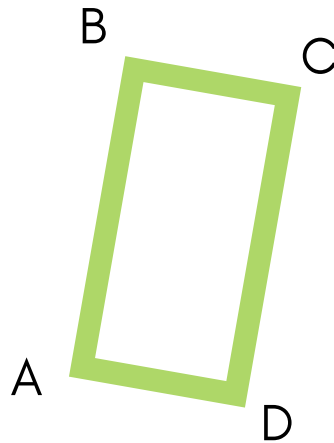
Teacher:

# ROTATIONS

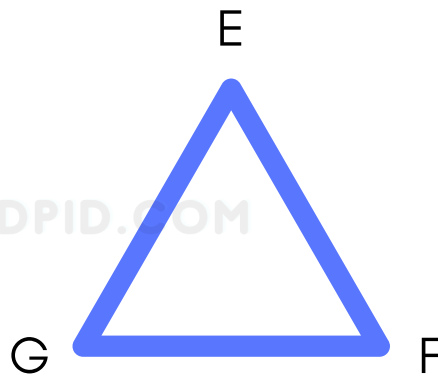


Rotate each figure given the angle measure and point. All rotations are counterclockwise.

90 degrees  
about point C.



180 degrees  
about point G.



KIDPID.COM




Name:

Section:

Date:

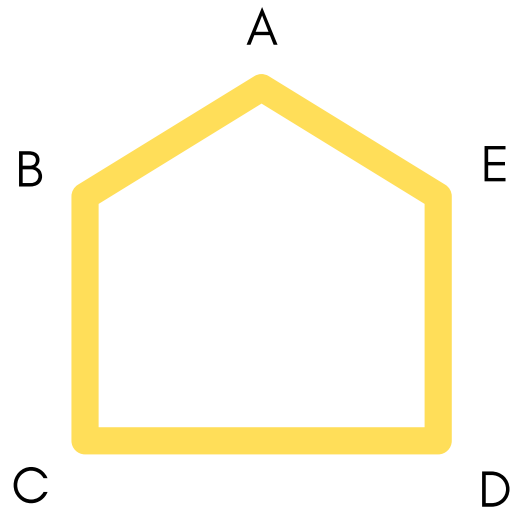
Teacher:

# ROTATIONS

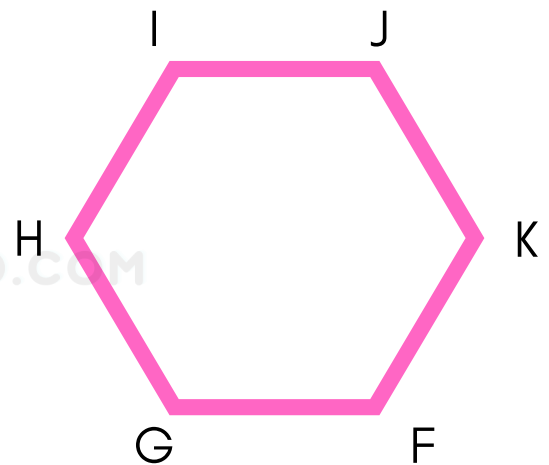


Rotate each figure given the angle measure and point. All rotations are counterclockwise.

270 degrees  
about point D.



135 degrees  
about point J.



KIDPID.COM




Name:

Section:

Date:

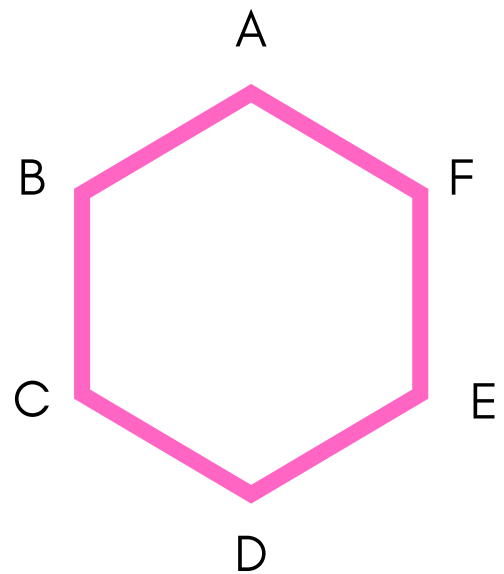
Teacher:

# ROTATIONS



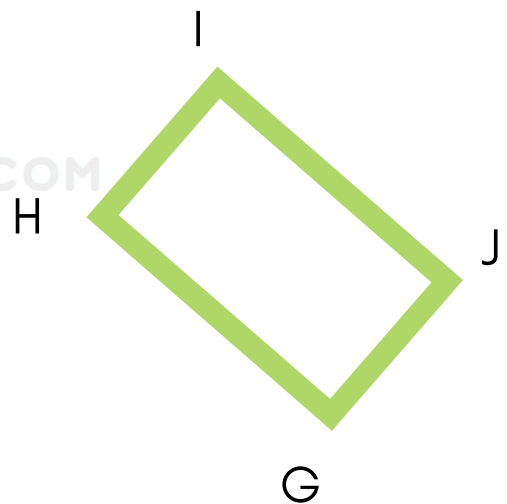
Rotate each figure given the angle measure and point. All rotations are counterclockwise.

45 degrees  
about point E.



180 degrees  
about point H.

KIDPID.COM






Name:

Section:

Date:

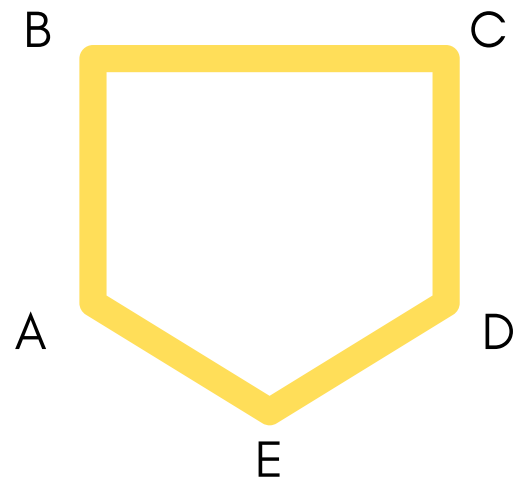
Teacher:

# ROTATIONS

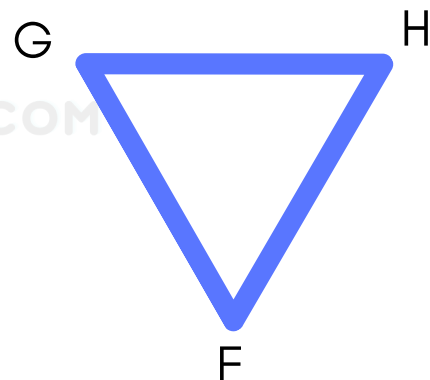


Rotate each figure given the angle measure and point. All rotations are counterclockwise.

45 degrees  
about point A.



225 degrees  
about point F.



KIDPID.COM




Name:

Section:

Date:

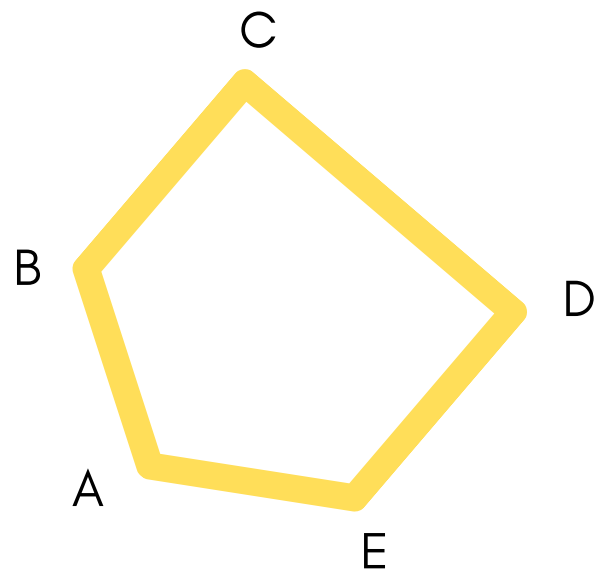
Teacher:

# ROTATIONS



Rotate each figure given the angle measure and point. All rotations are counterclockwise.

225 degrees  
about point A.



135 degrees  
about point F.

KIDPID.COM

