



Name:





Section:

Date:

Teacher:

SUBTRACTION

Complete the equation shown on the hands and write the answer in the space provided.



KIDPID.COM



Name:



Section:

Date:



Teacher:

SUBTRACTION

Complete the equation shown on the hands and write the answer in the space provided.



KIDPID.COM





Name:



Section:

Date:

Teacher:

SUBTRACTION

Complete the equation shown on the hands and write the answer in the space provided.



KIDPID.COM

