



Name: _____

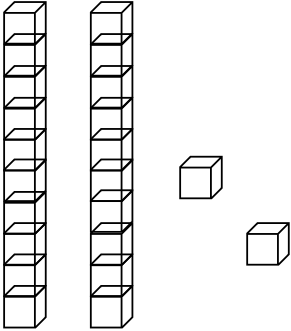
Section: _____

Date: _____

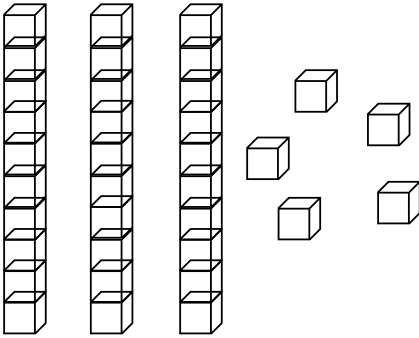
Teacher: _____

Counting tens and ones

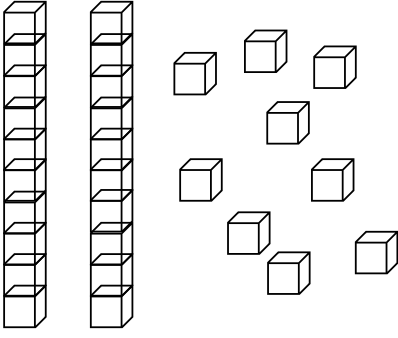
Find the total number of blocks.



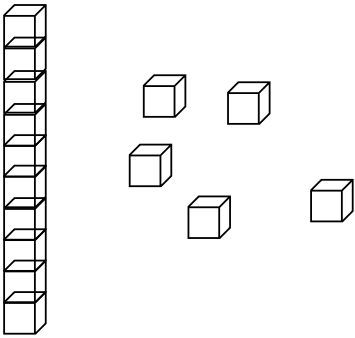
= 2 tens + 2 ones = 22



= ___ tens + ___ ones = ___



= ___ tens + ___ ones = ___



= ___ tens + ___ ones = ___

KIDPID.COM



Name: _____

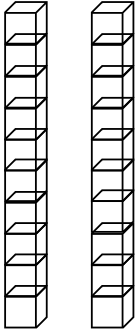
Section: _____

Date: _____

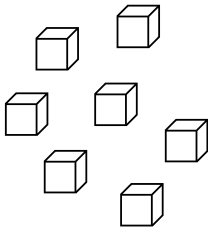
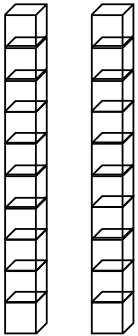
Teacher: _____

Counting tens and ones

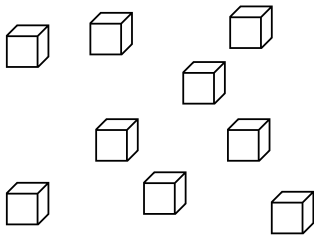
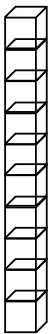
Find the total number of blocks.



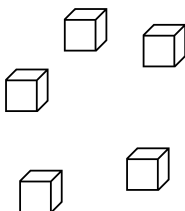
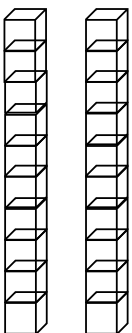
$$= \underline{2} \text{ tens} + \underline{0} \text{ ones} = 20$$



$$= \underline{\quad} \text{ tens} + \underline{\quad} \text{ ones} = \underline{\quad}$$



$$= \underline{\quad} \text{ tens} + \underline{\quad} \text{ ones} = \underline{\quad}$$



$$= \underline{\quad} \text{ tens} + \underline{\quad} \text{ ones} = \underline{\quad}$$



Name: _____

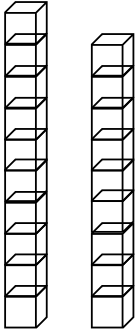
Section: _____

Date: _____

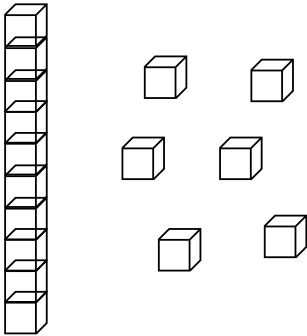
Teacher: _____

Counting tens and ones

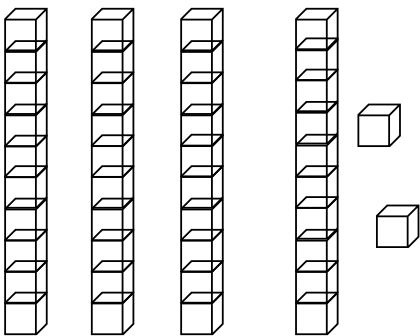
Find the total number of blocks.



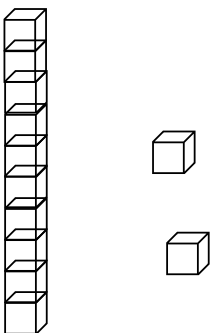
$$= \underline{1} \text{ tens} + \underline{9} \text{ ones} = 19$$



$$= \underline{\quad} \text{ tens} + \underline{\quad} \text{ ones} = \underline{\quad}$$



$$= \underline{\quad} \text{ tens} + \underline{\quad} \text{ ones} = \underline{\quad}$$



$$= \underline{\quad} \text{ tens} + \underline{\quad} \text{ ones} = \underline{\quad}$$

KIDPID.COM



Name: _____

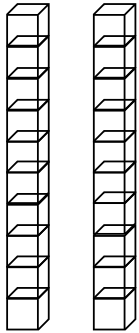
Section: _____

Date: _____


Teacher: _____

Counting tens and ones

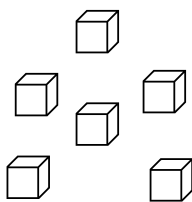
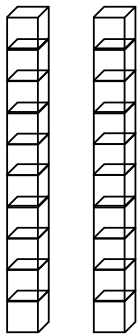
Find the total number of blocks.



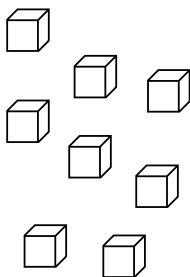
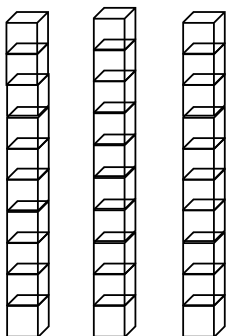
$$= \underline{2} \text{ tens} + \underline{1} \text{ ones} = 21$$



$$= \underline{\quad} \text{ tens} + \underline{\quad} \text{ ones} = \underline{\quad}$$



$$= \underline{\quad} \text{ tens} + \underline{\quad} \text{ ones} = \underline{\quad}$$



$$= \underline{\quad} \text{ tens} + \underline{\quad} \text{ ones} = \underline{\quad}$$

KIDPID.COM



Name: _____

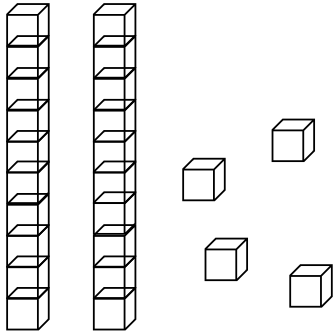
Section: _____

Date: _____

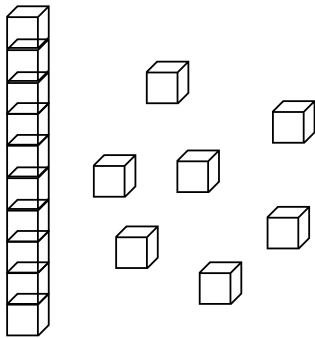
Teacher: _____

Counting tens and ones

Find the total number of blocks.




$$= \underline{2} \text{ tens} + \underline{4} \text{ ones} = 24$$

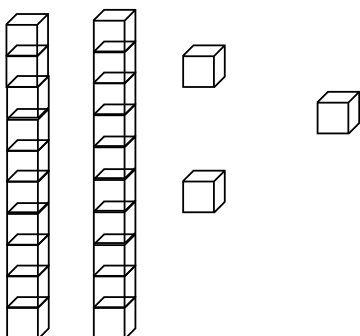


$$= \underline{\quad} \text{ tens} + \underline{\quad} \text{ ones} = \underline{\quad}$$

KIDPID.COM



$$= \underline{\quad} \text{ tens} + \underline{\quad} \text{ ones} = \underline{\quad}$$



$$= \underline{\quad} \text{ tens} + \underline{\quad} \text{ ones} = \underline{\quad}$$