



Name: _____

Section: _____

Date: _____

Teacher: _____


TIME

So many silly clocks! Write the time you see on each clocks.





















Name:

Section:

Date:

Teacher:

THE HOURS

Circle the correct time for each clock. Tick (✓) the correct answer.



9:00

4:00



11:00

5:00



4:00

3:00



12:00

3:00



9:00

2:00



5:00

1:00

KIDPID.COM




8:00

7:00



6:00

8:00



9:00

6:00



Name:

Section:

Date:

Teacher:

THE HOURS


Circle the correct time for each clock. Tick (✓) the correct answer.



9:00	<input type="checkbox"/>
4:00	<input type="checkbox"/>




11:00	<input type="checkbox"/>
5:00	<input type="checkbox"/>




4:00	<input type="checkbox"/>
3:00	<input type="checkbox"/>



12:00	<input type="checkbox"/>
3:00	<input type="checkbox"/>




9:00	<input type="checkbox"/>
4:00	<input type="checkbox"/>




5:00	<input type="checkbox"/>
1:00	<input type="checkbox"/>


KIDPID.COM



8:00	<input type="checkbox"/>
7:00	<input type="checkbox"/>



6:00	<input type="checkbox"/>
8:00	<input type="checkbox"/>



9:00	<input type="checkbox"/>
6:00	<input type="checkbox"/>



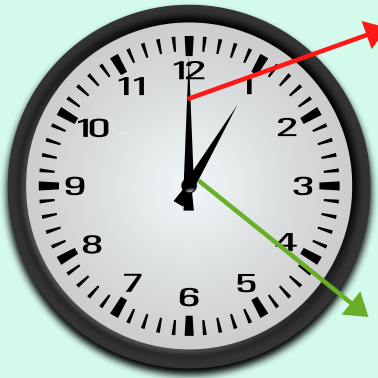
Name:

Section:

Date:

Teacher:

TICK TOCK



Big Hand. It points to the minutes.

1:00

Big Hand. It points to the minutes.

The little hand is pointing to the 9.

The big hand is pointing to the 12.

That means it's 9:00.



7:00



8:00



6:00

KIDPID.COM



12:00



9:00



5:00



Name:


Section:

Date:

Teacher:

MATCH THE CLOCKS

Draw a line to match the clocks that show the same time.



6:00

7:00

8:00

12:00

9:00

3:00

5:00

11:00

KIDPID.COM

