




Name: _____

Section: _____


Date: _____

Teacher: _____

all about the number
ONE




___ is the number before.



The number after is ___.

Fill out the squares in the ten frame:



KIDPID.COM

Practice:

one

111



Name: _____

Section: _____

Date: _____

Teacher: _____

all about the number
TWO




___ is the number before.



The number after is ___.

Fill out the squares in the ten frame:



Practice:

KIDPID.COM

two

2 2 2



Name: _____

Section: _____


Date: _____

Teacher: _____

all about the number
THREE




___ is the number before.



The number after is ___.

Fill out the squares in the ten frame:



Practice:

KIDPID.COM

three

3 3 3




Name: _____

Section: _____


Date: _____

Teacher: _____

all about the number
FOUR




___ is the number before.



The number after is ___.

Fill out the squares in the ten frame:



Practice:

four

4 4 4

KIDPID.COM



Name: _____

Section: _____

Date: _____

Teacher: _____

all about the number
FIVE




___ is the number before.



The number after is ___.

Fill out the squares in the ten frame:



KIDPID.COM

Practice:

five

5 5 5




Name: _____

Section: _____


Date: _____

Teacher: _____

all about the number
SIX




___ is the number before.



The number after is ___.

Fill out the squares in the ten frame:



KIDPID.COM

Practice:

six

6 6 6




Name: _____

Section: _____

Date: _____

Teacher: _____

all about the number
SEVEN




___ is the number before.



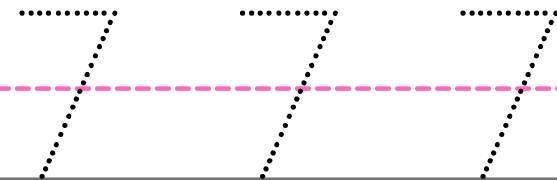
The number after is ___.

Fill out the squares in the ten frame:



Practice:

seven



KIDPID.COM




Name: _____

Section: _____


Date: _____

Teacher: _____

all about the number
EIGHT




___ is the number before.



The number after is ___.

Fill out the squares in the ten frame:



KIDPID.COM

Practice:





Name: _____

Section: _____


Date: _____

Teacher: _____

all about the number
NINE




___ is the number before.



The number after is ___.

Fill out the squares in the ten frame:



KIDPID.COM

Practice:

nine

9 9 9




Name: _____

Section: _____


Date: _____

Teacher: _____

all about the number
TEN




___ is the number before.



The number after is ___.

Fill out the squares in the ten frame:



KIDPID.COM

Practice:

ten

10 10